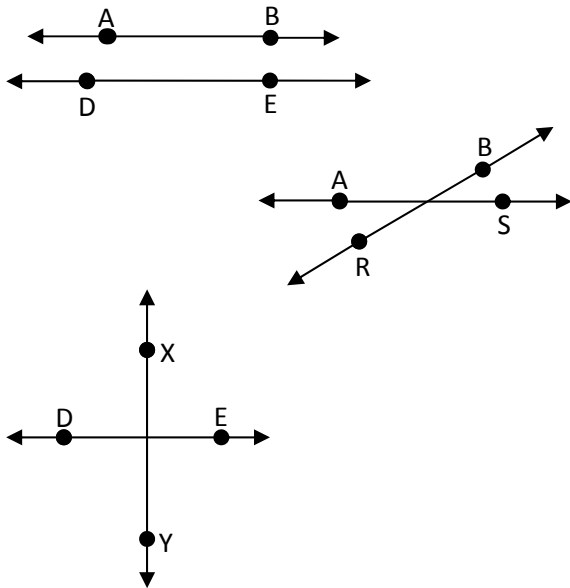



Parallel Lines

Parallel lines are lines that are the same distance apart along their entire length. Parallel lines never cross or intersect with each other. Complete the exercises below.

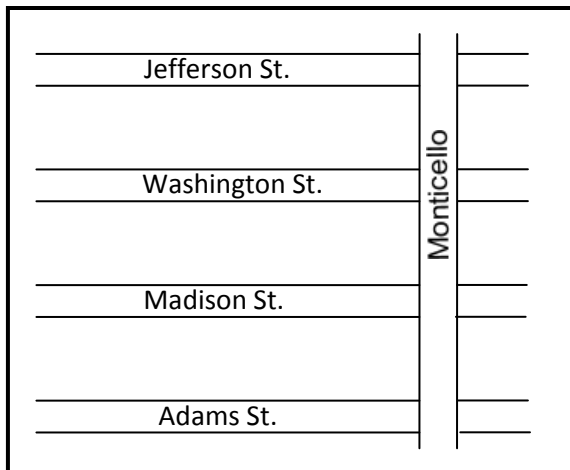
Circle the lines that are parallel to each other.



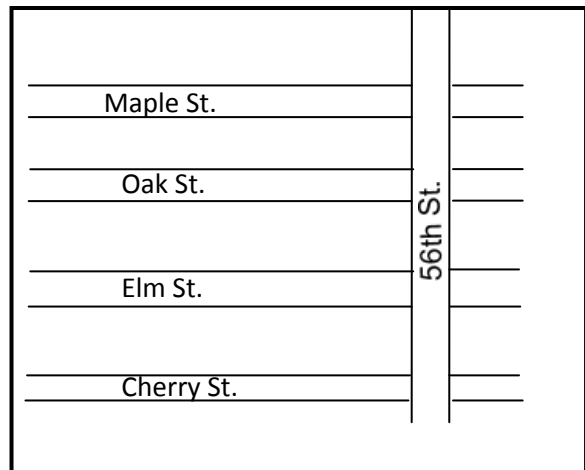
Draw a line that is parallel to line DE . Draw points on the line and label the line as line XY .



Examine the map and circle the correct answer. Is Madison street parallel to Adams street? Yes No



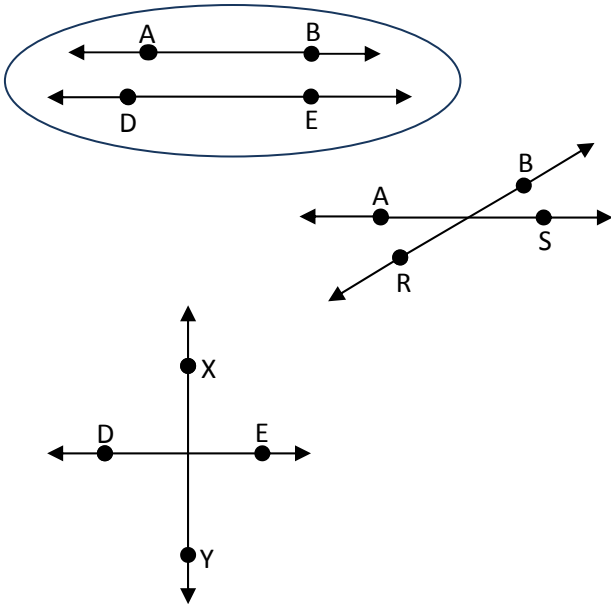
Examine the map and circle the correct answer. Is 56th Street parallel to Cherry street? Yes No




Parallel Lines

Parallel lines are lines that are the same distance apart along their entire length. Parallel lines never cross or intersect with each other. Complete the exercises below.

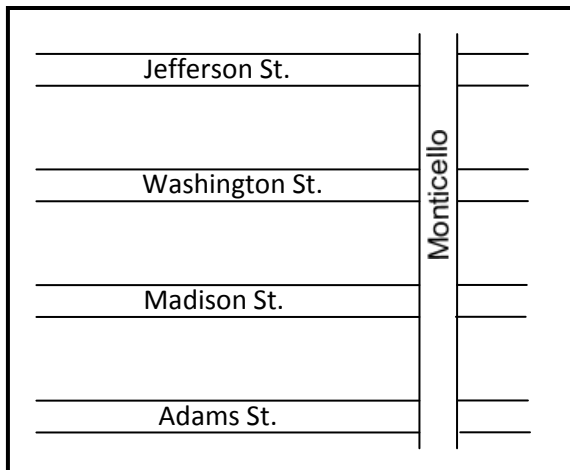
Circle the lines that are parallel to each other.



Draw a line that is parallel to line DE . Draw points on the line and label the line as line XY .



Examine the map and circle the correct answer. Is Madison street parallel to Adams street? Yes No



Examine the map and circle the correct answer. Is 56th Street parallel to Cherry street? Yes No

